

WORKSHEET



SESSION 16

Sign Detection in Self Driving Car

This worksheet belongs to _____

1. Which of the following sentences are true for self-driving cars? (1 or more correct answer):

- a) They can drive themselves
- b) They use sensors and systems to drive the car
- c) They cannot understand traffic lights
- d) They know when to stop, slow down or take turns

Answer: _____

3 Points

2. Self-driving cars can sense other vehicles and people crossing the roads but not bumps on the roads, bumps need to be handled manually.

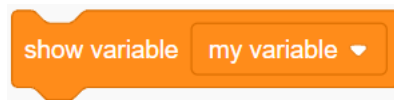
- a) True
- b) False

Answer: _____

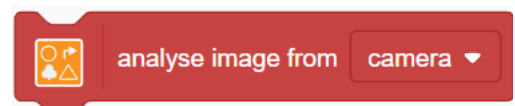
1 Point

3. Which of these block, detects the class of the object that is detected in the camera?

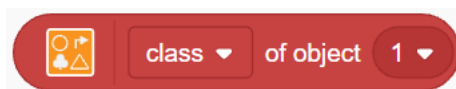
a)



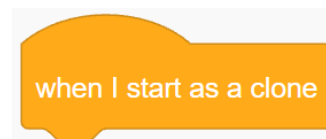
c)



b)



d)

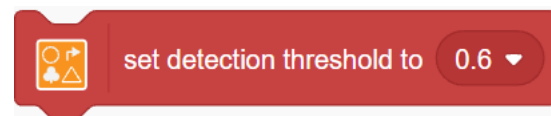


Answer: _____


1 Point

4. Re-order the following blocks in the correct flow for proper usage

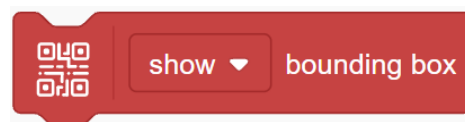
a)



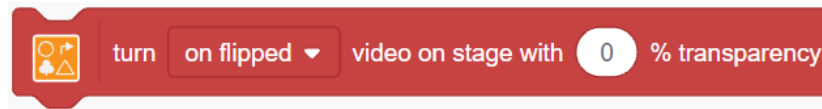
b)



c)



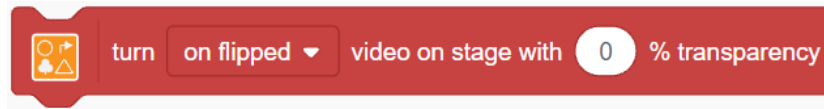
d)



Answer: (i) ____ (ii) ____ (iii) ____ (iv) ____

3 Points

5. In the **block-**



, why do we

choose the option **on flipped** from the dropdown, Explain.

Answer: _____

2 Points